
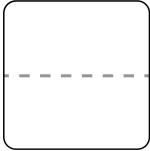

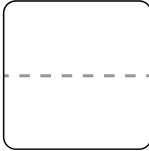

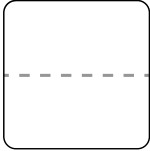
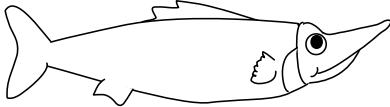
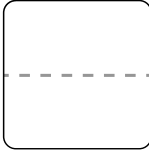
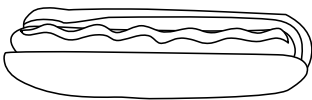
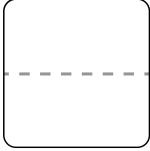

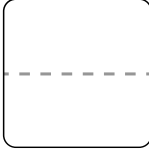
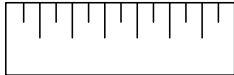
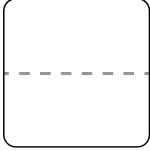
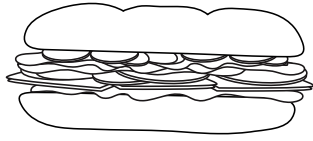
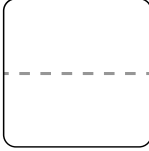


Name: \_\_\_\_\_

# Measure Length

<p>1</p>  <p>_____</p> 	<p>2</p>  <p>_____</p> 
<p>3</p>  <p>_____</p> 	<p>4</p>  <p>_____</p> 
<p>5</p>  <p>_____</p> 	<p>6</p>  <p>_____</p> 
<p>7</p>  <p>_____</p> 	<p>8</p>  <p>_____</p> 

Measure each object by counting how many squares equal the object's length. Write the number of squares in the box next to the picture.